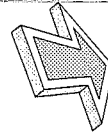


EUROPE Physical and Political Maps**Activity 27**

Use the maps on pages 64–67 to answer these questions.

1. What island nation is separated from mainland Europe by the English Channel and the North Sea? _____
2. The tallest mountain in Europe is located between the Black Sea (C-7) and the Caspian Sea (C-8). What is the name of the mountain? _____
How tall is it? _____ In what mountain range is it located? _____
3. What mountain range forms the border between France and Spain? _____
4. Name the water passage that connects the Mediterranean Sea with the Atlantic Ocean.

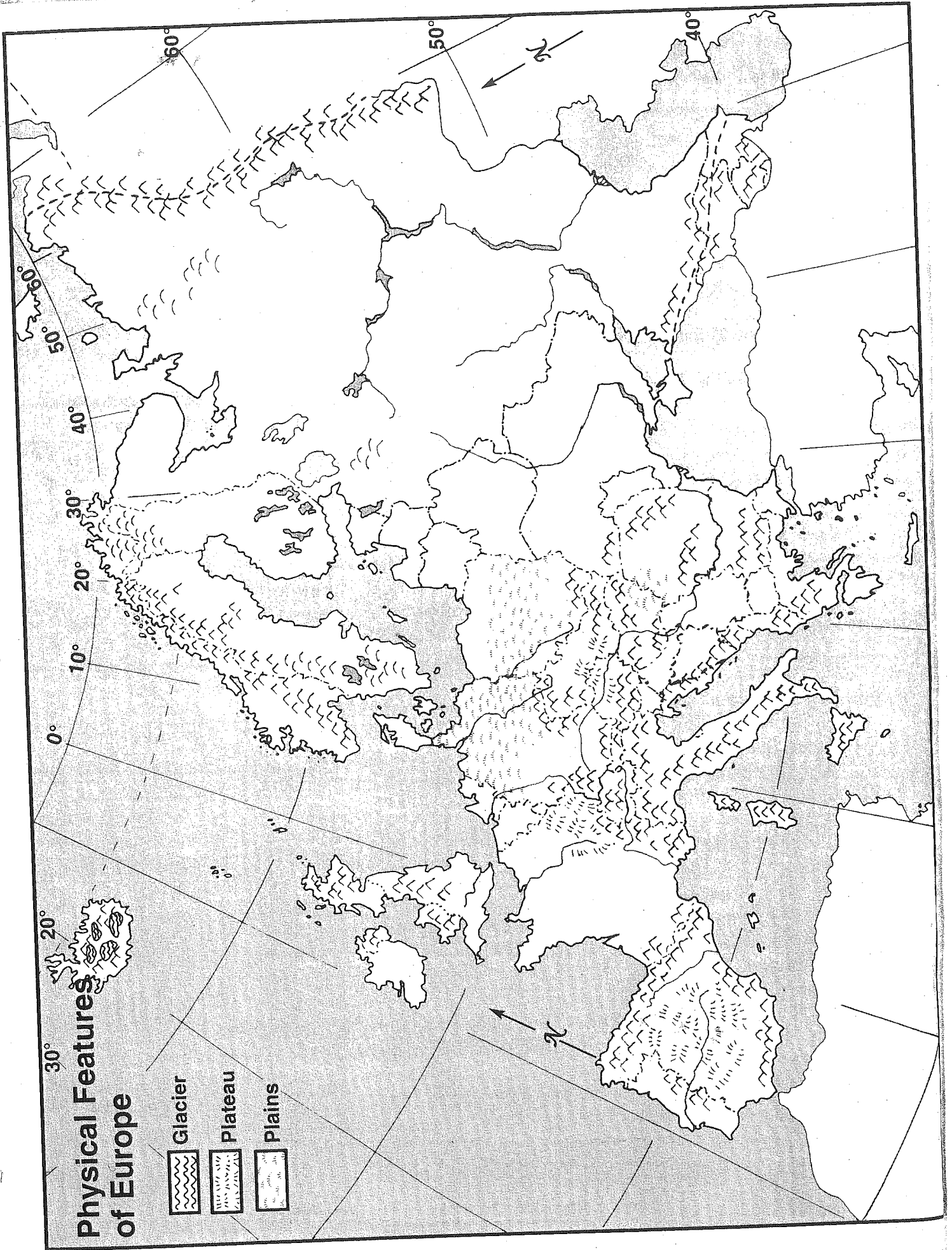
5. Identify the capital city of each of the following countries:
 - a. Austria _____
 - b. Spain _____
 - c. Italy _____
 - d. Norway _____
 - e. Poland _____
6. What differences do you see in the physical features of southwestern Europe and southeastern Europe? _____

7. Use the World Political Map on pages 10–11 to compare North America and Europe. What are some differences between the two continents? _____




How could these differences affect the lives of the people of the two continents?

GEO-CHALLENGE!

You and your family are planning a European trip. You want to drive from Oslo, Norway (A-5) to Naples, Italy (C-5). You do not want to ride on any ferries because you get terribly seasick. Without crossing any seas, what is the fewest number of countries you can drive through to get from Oslo to Naples? _____ Name the countries. _____



**Physical Features
of Europe**

-  Glacier
-  Plateau
-  Plains